



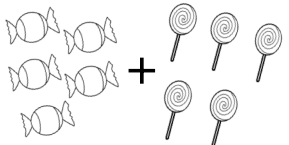
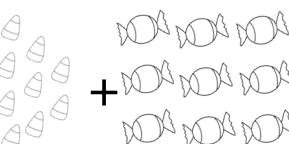
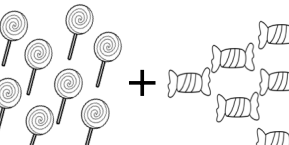
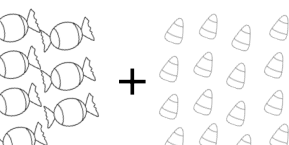
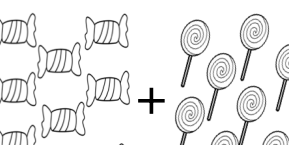
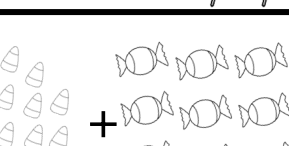
October Numbers

Name _____

Write the missing numbers.

16		18		
21			24	

Add. Draw a line to the sum.



● 18

● 14

● 20

● 16

● 10

● 23

Graphics

