


Name \_\_\_\_\_


# Spring Garden Subtraction

Solve. Draw an X on the pictures that are subtracted.


$12 - 10 = \underline{\hspace{2cm}}$




$9 - 3 = \underline{\hspace{2cm}}$




$10 - 5 = \underline{\hspace{2cm}}$



$11 - 8 = \underline{\hspace{2cm}}$



$8 - 4 = \underline{\hspace{2cm}}$



$10 - 6 = \underline{\hspace{2cm}}$

