

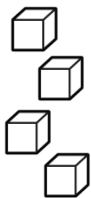
# Addition

Name \_\_\_\_\_

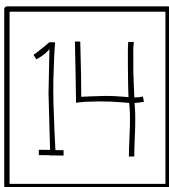
Trace. Finish the number sentence. Use the pictures for help.



+



=




$$10 + \underline{\quad} = \underline{\quad}$$



+



=




$$10 + \underline{\quad} = \underline{\quad}$$



+



=




$$10 + \underline{\quad} = \underline{\quad}$$



+



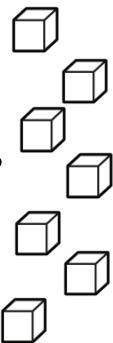
=




$$10 + \underline{\quad} = \underline{\quad}$$



+



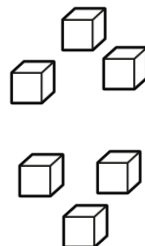
=



$$10 + \underline{\quad} = \underline{\quad}$$



+



=



$$10 + \underline{\quad} = \underline{\quad}$$

Many more worksheets are available in my Spring Packet. Available in my online shops.

# Kindergarten SPRING MATH & LITERACY Packet

Graphics from:

