

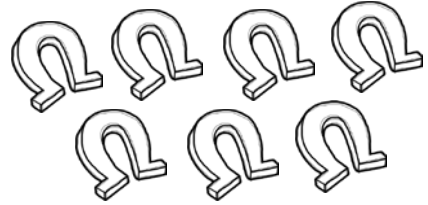
St. Patrick's

Name _____


Subtraction

Trace. Solve. Use the pictures for help.

$$7 - 5 = \underline{\quad}$$




$$10 - 6 = \underline{\quad}$$



$$5 - 4 = \underline{\quad}$$




$$3 - 3 = \underline{\quad}$$



$$6 - 3 = \underline{\quad}$$



$$4 - 1 = \underline{\quad}$$



Graphics from:

