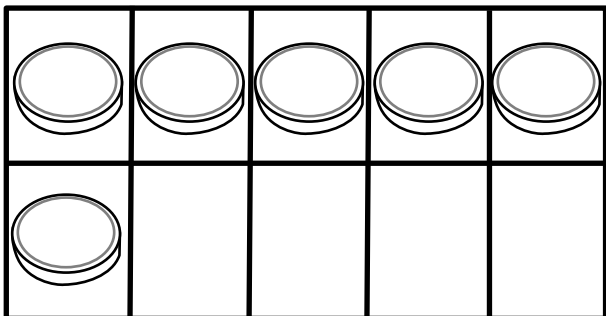


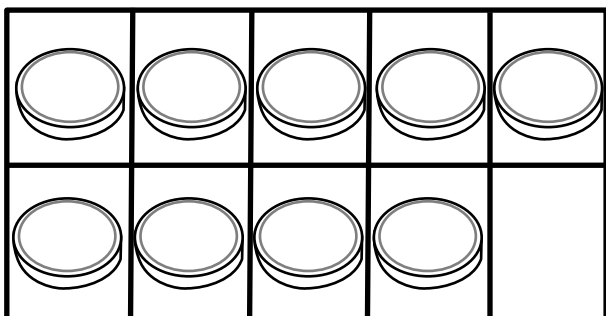
# Golden Math

Name \_\_\_\_\_

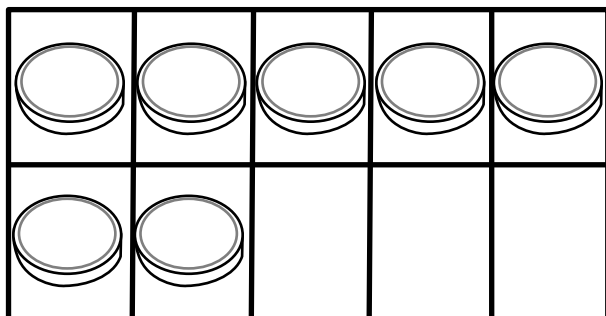
Draw more gold coins to complete the ten frame.  
Write the number model.



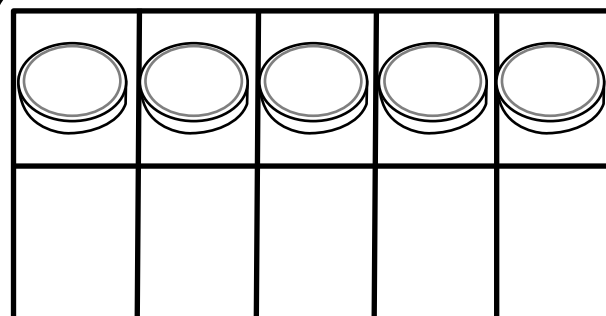
$$6 + \underline{\quad} = 10$$



$$9 + \underline{\quad} = 10$$



$$7 + \underline{\quad} = 10$$

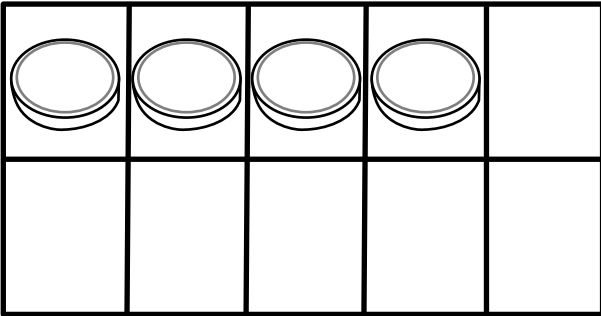


$$5 + \underline{\quad} = 10$$

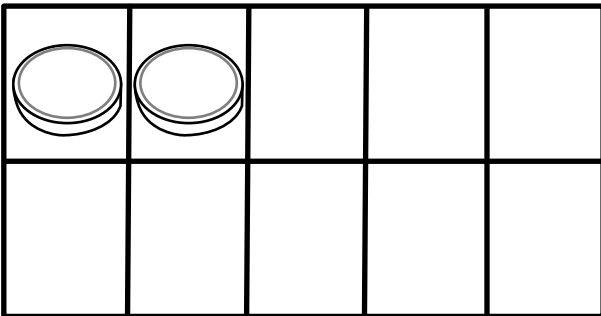
# Golden Math

Name \_\_\_\_\_

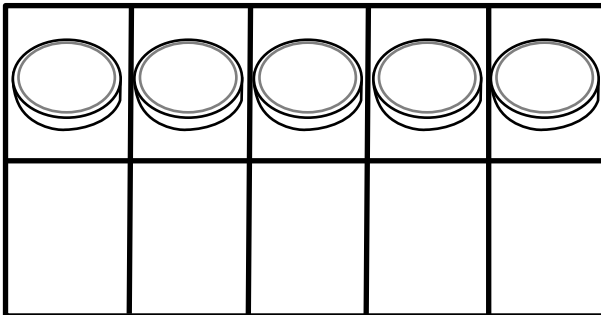
Draw more gold coins to complete the ten frame.  
Write the number model.



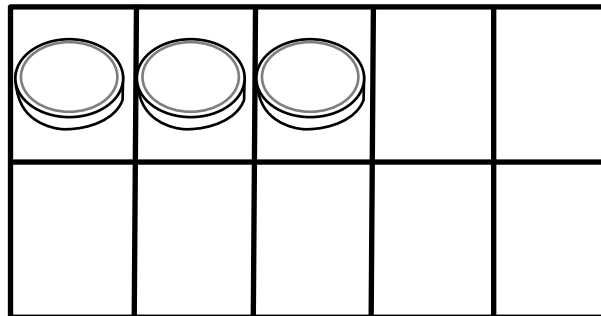
$$4 + \underline{\quad} = 10$$



$$2 + \underline{\quad} = 10$$



$$5 + \underline{\quad} = 10$$



$$3 + \underline{\quad} = 10$$

Many more worksheets are available in my Spring Packet. Available in my online shops.

# Kindergarten SPRING MATH & LITERACY Packet

Graphics from:



[and Clip Art Stand by Tina Anne](#)