

St. Patrick's

Name _____

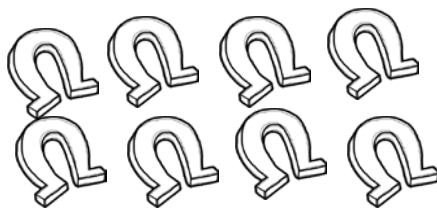
Subtraction

Trace. Solve. Use the pictures for help.


$10 - 5 = \underline{\quad}$
 $\quad \quad \quad = \underline{\quad}$




$8 - 6 = \underline{\quad}$
 $\quad \quad \quad = \underline{\quad}$




$10 - 4 = \underline{\quad}$
 $\quad \quad \quad = \underline{\quad}$



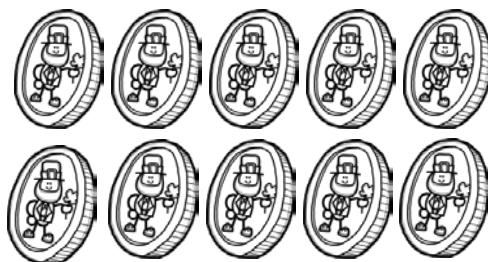
$5 - 3 = \underline{\quad}$
 $\quad \quad \quad = \underline{\quad}$



$2 - 1 = \underline{\quad}$
 $\quad \quad \quad = \underline{\quad}$



$10 - 9 = \underline{\quad}$
 $\quad \quad \quad = \underline{\quad}$



Graphics from:

