



Name \_\_\_\_\_

# Spring Flowers Subtraction




Read the math story. Use the pictures to solve.

I have 9 flowers. I give you 4.  
How many are left?




$$9 - 4 = \underline{\quad}$$

I have 12 flowers. I give you 9.  
How many are left?




$$12 - 9 = \underline{\quad}$$

I have 11 flowers. I give you 3.  
How many are left?




$$11 - 3 = \underline{\quad}$$

I have 9 flowers. I give you 8.  
How many are left?




$$9 - 8 = \underline{\quad}$$

I have 8 flowers. I give you 2.  
How many are left?



$$8 - 2 = \underline{\quad}$$

I have 10 flowers. I give you 7.  
How many are left?



$$10 - 7 = \underline{\quad}$$