



Name \_\_\_\_\_

# Spring Flowers Subtraction




Read the math story. Use the pictures to solve.

I have 8 flowers. I give you 5.  
How many are left?




$$8 - 5 = \underline{\quad}$$

I have 5 flowers. I give you 4.  
How many are left?




$$5 - 4 = \underline{\quad}$$

I have 4 flowers. I give you 4.  
How many are left?




$$4 - 4 = \underline{\quad}$$

I have 7 flowers. I give you 3.  
How many are left?




$$7 - 3 = \underline{\quad}$$

I have 5 flowers. I give you 2.  
How many are left?



$$5 - 2 = \underline{\quad}$$

I have 6 flowers. I give you 3.  
How many are left?



$$6 - 3 = \underline{\quad}$$