



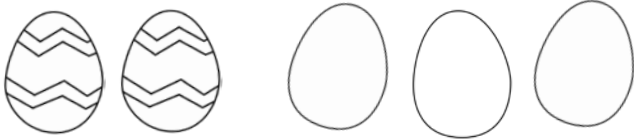
Easter Eggs

Name _____

Addition Stories

Read the math story. Use the pictures to solve.

I see 2 colored eggs. I see 3 white eggs. How many in all?




$$2 + 3 = \underline{\quad}$$

I see 2 colored eggs. I see 2 white eggs. How many in all?



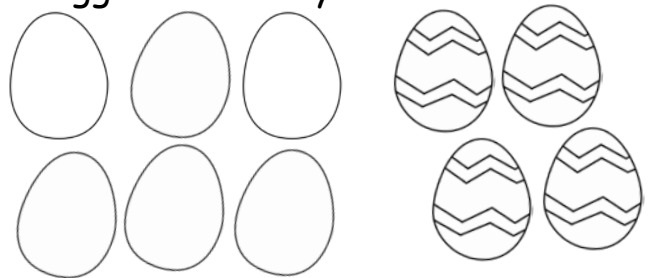
$$2 + 2 = \underline{\quad}$$

I see 5 white eggs. I see 3 colored eggs. How many in all?



$$5 + 3 = \underline{\quad}$$

I see 6 white eggs. I see 4 colored eggs. How many in all?



$$6 + 4 = \underline{\quad}$$

Read the math story and solve. Show with pictures. Show with numbers.

I see 2 white eggs. I see 1 colored egg. How many in all?

$$\underline{\quad} + \underline{\quad} = \underline{\quad}$$

I see 3 white eggs. I see 3 colored eggs. How many in all?

$$\underline{\quad} + \underline{\quad} = \underline{\quad}$$